
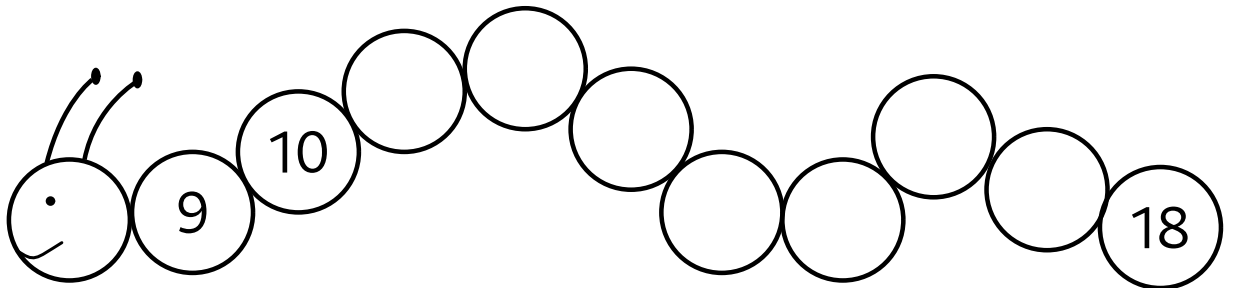


Niveroù ha niveriñ

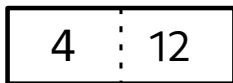
Kementadoù ha niveroù betek 20



1 Skrivañ pep niver a vank war an heuliad.



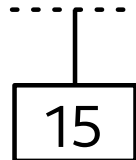

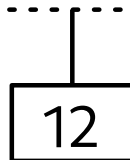

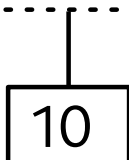

2 Kelc'hiañ an niver bihanañ bep tro.



3 Kelc'hiañ an niver brasañ bep tro.




2 Tresañ ar jedoueroù.

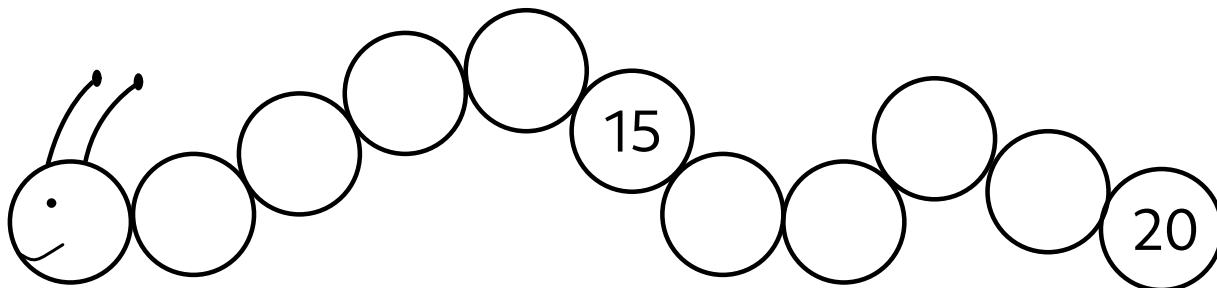


Niveroù ha niveriñ

Kementadoù ha niveroù betek 20



1 Skrivañ pep niver a vank war an heuliad.



2 Kelc'hiañ an niver bihanañ bep tro.

4 | 14

13 | 9

7 | 12

15 | 14

3 Kelc'hiañ an niver brasañ bep tro.


15 | 11

19 | 16


20 | 2

16 | 20


2 Tresañ ar jedoueroù.



11




17



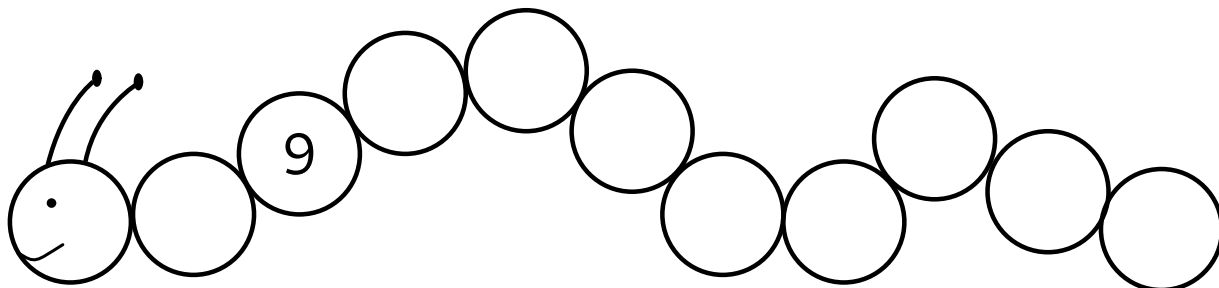
14

Niveroù ha niveriñ

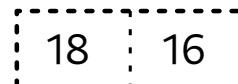
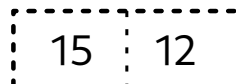

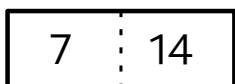
Kementadoù ha niveroù betek 20




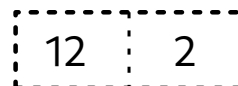
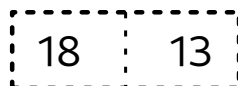
1 Skrivañ pep niver a vank war an heuliad.



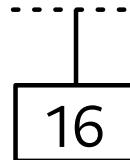

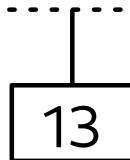

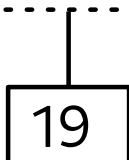

2 Kelc'hiañ an niver bihanañ bep tro.



3 Kelc'hiañ an niver brasañ bep tro.




2 Tresañ ar jedoueroù.



Niveroù ha niveriñ

Kementadoù ha niveroù betek 20



1 Pet kanetenn 'zo ? Skrivañ an niver.

Four rounded rectangular containers, each containing a grid of circles. Below each container is a small square box for writing the number.

- Container 1: 20 circles (4 rows of 5).
- Container 2: 10 circles (2 rows of 5).
- Container 3: 15 circles (3 rows of 5).
- Container 4: 11 circles (3 rows of 5, with 1 circle in the first row).

2 Jediñ ha livañ an niver mat.

Two number lines from 7 to 22. A rabbit is shown on the number line in the first example, and an arrow indicates a jump of +3 to the right. In the second example, a rabbit is shown on the number line, and an arrow indicates a jump of -2 to the left.


3 Skrivañ an niveroù-mañ eus an hini bihanañ d'an hini brasañ.

$$16 - 8 - 10$$

Three rounded rectangular boxes for writing the results of the subtraction.

Niveroù ha niveriñ

Kementadoù ha niveroù betek 20



1 Pet kanetenn 'zo ? Skrivañ an niver.

<input type="text"/>	<input type="text"/>	<input type="text"/>	<input type="text"/>

2 Jediñ ha livañ an niver mat.

7	8	9	10	11	12	13	14	15	16	17	18	19	20	21	22
---	---	---	----	----	----	----	----	----	----	----	----	----	----	----	----

+5 →

7	8	9	10	11	12	13	14	15	16	17	18	19	20	21	22
---	---	---	----	----	----	----	----	----	----	----	----	----	----	----	----

← -3

3 Skrivañ an niveroù-mañ eus an hini bihanañ d'an hini brasañ.

$$20 - 2 - 12$$

<input type="text"/>	<input type="text"/>	<input type="text"/>
----------------------	----------------------	----------------------

Niveroù ha niveriñ

Kementadoù ha niveroù betek 20



1 Pet kanetenn 'zo ? Skrivañ an niver.

<input type="text"/>	<input type="text"/>	<input type="text"/>	<input type="text"/>

2 Jediñ ha livañ an niver mat.

7	8	9	10	11	12	13	14	15	16	17	18	19	20	21	22
---	---	---	----	----	----	----	----	----	----	----	----	----	----	----	----

+4 →

7	8	9	10	11	12	13	14	15	16	17	18	19	20	21	22
---	---	---	----	----	----	----	----	----	----	----	----	----	----	----	----

← -5


3 Skrivañ an niveroù-mañ eus an hini bihanañ d'an hini brasañ.

$$15 - 17 - 13$$

<input type="text"/>	<input type="text"/>	<input type="text"/>
----------------------	----------------------	----------------------

Niveroù ha niveriñ

Kementadoù ha niveroù betek 20



1 Skrivañ an niveroù-mañ eus an hini brasañ d'an hini bihanañ.

$$12 - 2 = 20$$



2 Liammañ.

12

20

17

11

15

$10 + 2$


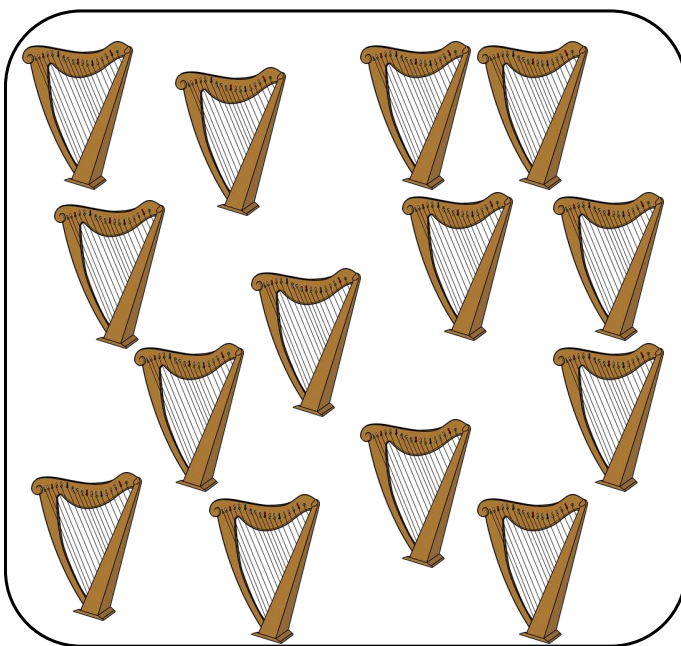
$10 + 1$

$10 + 5$

$10 + 7$


$10 + 10$

3 Pet 'zo?




Niveroù ha niveriñ

Kementadoù ha niveroù betek 20



1 Skrivañ an niveroù-mañ eus an hini brasañ d'an hini bihanañ.



$$17 - 12 - 14$$



2 Liammañ.


11	14	16	10	19
$10 + 4$	$10 + 1$	$10 + 6$	$10 + 9$	$10 + 0$

3 Pet 'zo?



Niveroù ha niveriñ

Kementadoù ha niveroù betek 20



1 Skrivañ an niveroù-mañ eus an hini brasañ d'an hini bihanañ.

11 - 20 - 19



2 Liammañ.

18

17

13

12

15

10 + 8

10 + 2

10 + 5

10 + 7

10 + 3

3 Pet 'zo?

