
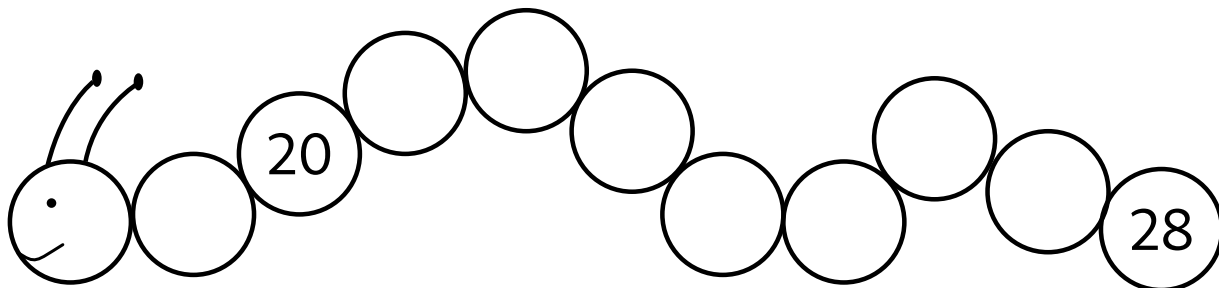


Niveroù ha niveriñ

Kementadoù ha niveroù betek 30



1 Skrivañ pep niver a vank war an heuliad.



2 Kelc'hiañ an niver bihanañ bep tro.

5 | 20

18 | 28

29 | 16

19 | 21

3 Kelc'hiañ an niver brasañ bep tro.


20 | 2

16 | 23


19 | 9

17 | 30


4 Tresañ ar jedoueroù.



10




21



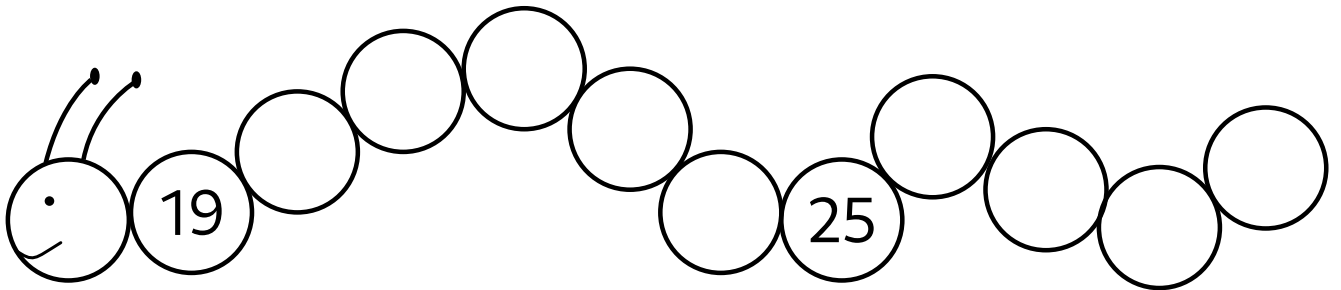
25

Niveroù ha niveriñ


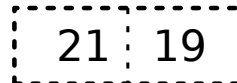
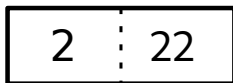
Kementadoù ha niveroù betek 30



1 Skrivañ pep niver a vank war an heuliad.



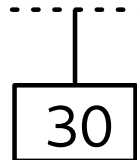

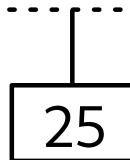

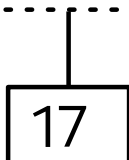

2 Kelc'hiañ an niver bihanañ bep tro.



3 Kelc'hiañ an niver brasañ bep tro.




4 Tresañ ar jedoueroù.

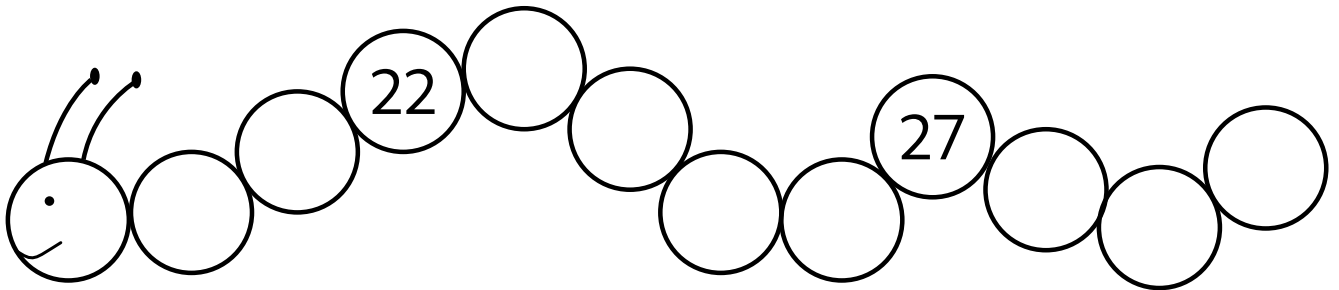


Niveroù ha niveriñ

Kementadoù ha niveroù betek 30



1 Skrivañ pep niver a vank war an heuliad.



2 Kelc'hiañ an niver bihanañ bep tro.

7 22

22 12

21 22

29 26

3 Kelc'hiañ an niver brasañ bep tro.


12 2

28 19


25 26

13 30


4 Tresañ ar jedoueroù.



20



27



22

Niveroù ha niveriñ

Kementadoù ha niveroù betek 30



1 Pet kanetenn 'zo ? Skrivañ an niver.

<input type="text"/>	<input type="text"/>	<input type="text"/>	<input type="text"/>

2 Jediñ ha livañ an niver mat.

$+3$

-2


3 Skrivañ an niveroù-mañ eus an hini bihanañ d'an hini brasañ.

$$26 - 6 - 16$$

<input type="text"/>	<input type="text"/>	<input type="text"/>
----------------------	----------------------	----------------------

Niveroù ha niveriñ

Kementadoù ha niveroù betek 30



1 Pet kanetenn 'zo ? Skrivañ an niver.

<input type="text"/>	<input type="text"/>	<input type="text"/>	<input type="text"/>

2 Jediñ ha livañ an niver mat.

17	18	19	20	21	22	23	24	25	26	27	28	29	30	31	32
----	----	----	----	----	----	----	----	----	----	----	----	----	----	----	----

+2 →

17	18	19	20	21	22	23	24	25	26	27	28	29	30	31	32
----	----	----	----	----	----	----	----	----	----	----	----	----	----	----	----

← -2


3 Skrivañ an niveroù-mañ eus an hini bihanañ d'an hini brasañ.

$$9 - 29 - 20$$

<input type="text"/>	<input type="text"/>	<input type="text"/>
----------------------	----------------------	----------------------

Niveroù ha niveriñ

Kementadoù ha niveroù betek 30



1 Pet kanetenn 'zo ? Skrivañ an niver.

<input type="text"/>	<input type="text"/>	<input type="text"/>	<input type="text"/>

2 Jediñ ha livañ an niver mat.

17	18	19	20	21	22	23	24	25	26	27	28	29	30	31	32
----	----	----	----	----	----	----	----	----	----	----	----	----	----	----	----

+ 3
→

17	18	19	20	21	22	23	24	25	26	27	28	29	30	31	32
----	----	----	----	----	----	----	----	----	----	----	----	----	----	----	----

← - 4


3 Skrivañ an niveroù-mañ eus an hini bihanañ d'an hini brasañ.

$$23 - 21 - 28$$

<input type="text"/>	<input type="text"/>	<input type="text"/>
----------------------	----------------------	----------------------

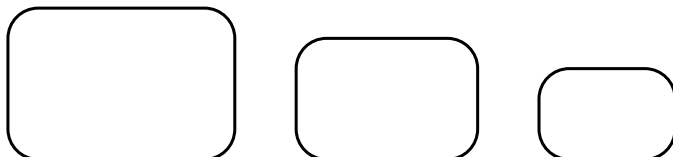
Niveroù ha niveriñ

Kementadoù ha niveroù betek 30



1 Skrivañ an niveroù-mañ eus an hini brasañ d'an hini bihanañ.

$$22 - 2 - 20$$



2 Liammañ.

14

20

28

21

24

$20 + 8$



$20 + 1$

$10 + 4$

$20 + 4$


$10 + 10$

3 Pet 'zo?



Niveroù ha niveriñ

Kementadoù ha niveroù betek 30



1 Skrivañ an niveroù-mañ eus an hini brasañ d'an hini bihanañ.

$$23 - 9 - 18$$

2 Liammañ.

22

23

13

27

25

20 + 7



20 + 2

20 + 3

10 + 3


20 + 5

3 Pet 'zo?



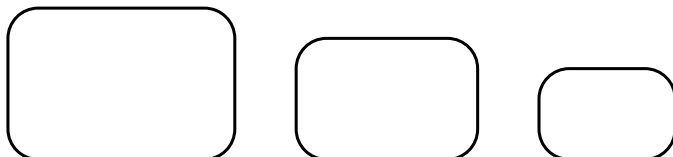
Niveroù ha niveriñ

Kementadoù ha niveroù betek 30



1 Skrivañ an niveroù-mañ eus an hini brasañ d'an hini bihanañ.

20 - 23 - 30



2 Liammañ.

29

21

23

19

25

20 + 9

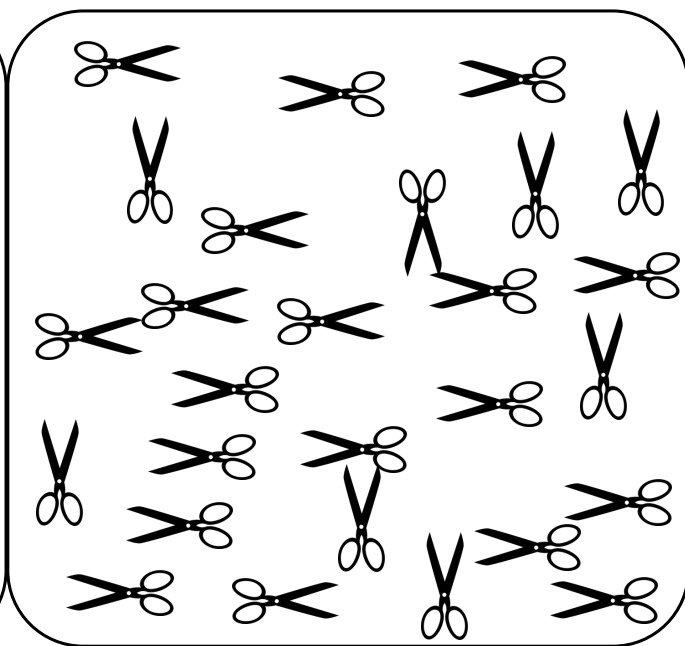
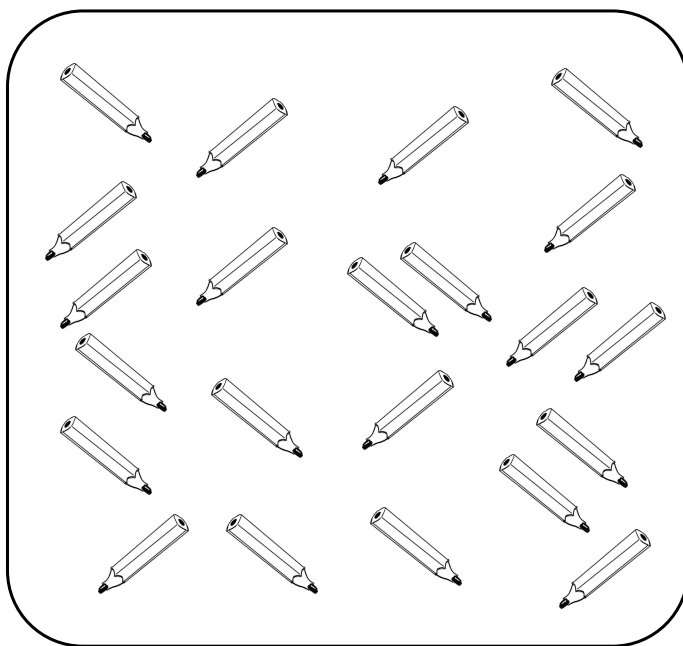
20 + 1

10 + 9

20 + 5


20 + 3

3 Pet 'zo?



Niveroù ha niveriñ

Kementadoù ha niveroù betek 30



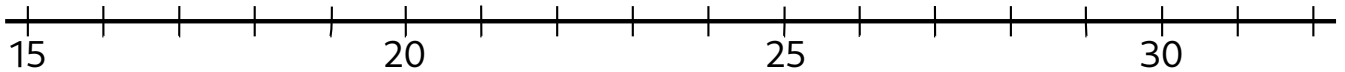
1 Liamm pep niver ouzh e verk war al linenn dereziet.

18

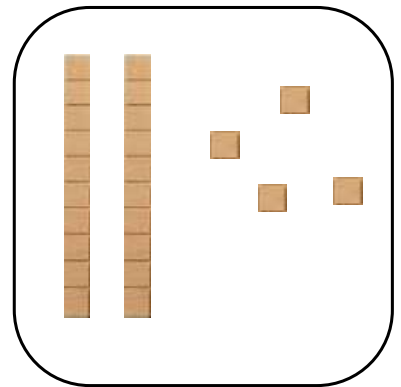
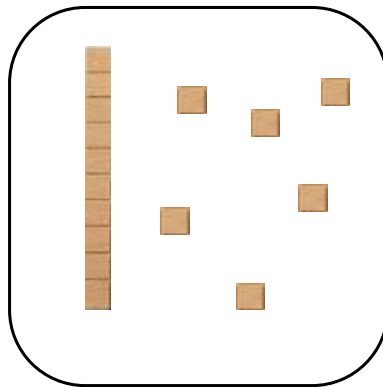
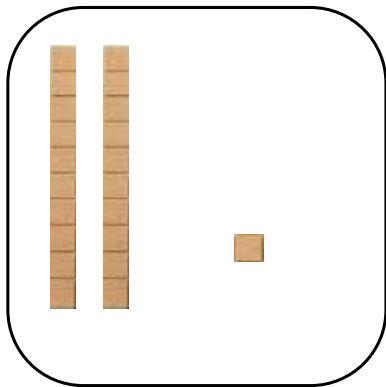
21

24

27



2 Skrivañ an niver.




3 Skrivañ an niveroù a vank.

0	1	2				6			
				14			17		19
20			23		25			28	

Niveroù ha niveriñ

Kementadoù ha niveroù betek 30



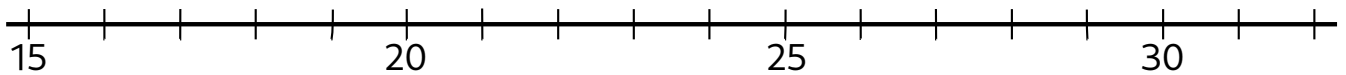
1 Liamm pep niver ouzh e verk war al linenn dereziet.

22

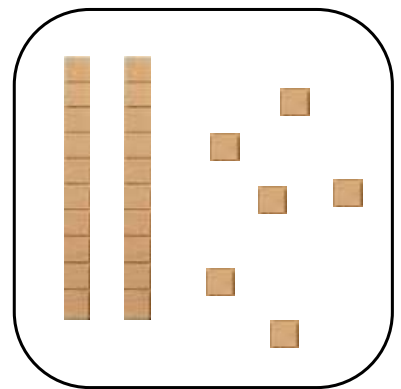
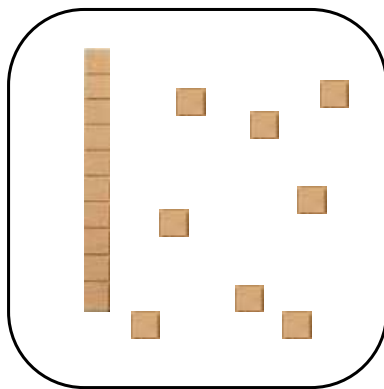
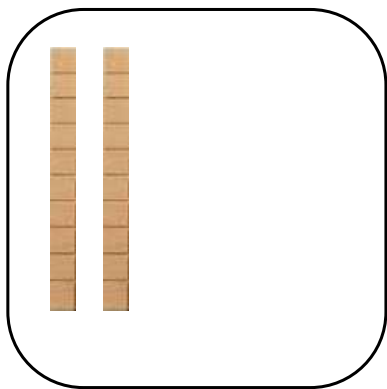
19

23

28



2 Skrivañ an niver.



3 Skrivañ an niveroù a vank.

0		2				6			9
				14	15		17		
20	21		23					28	

Niveroù ha niveriñ

Kementadoù ha niveroù betek 30



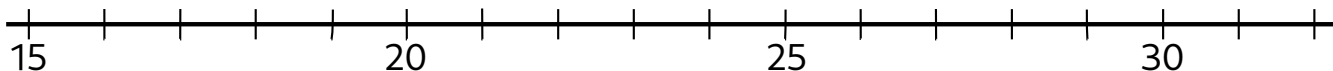
1 Liamm pep niver ouzh e verk war al linenn dereziet.

16

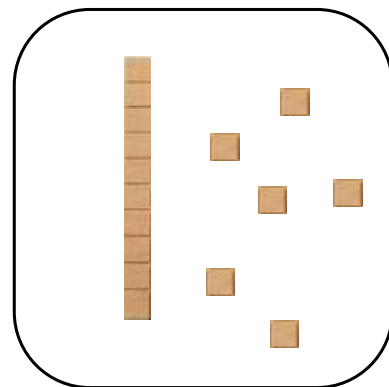
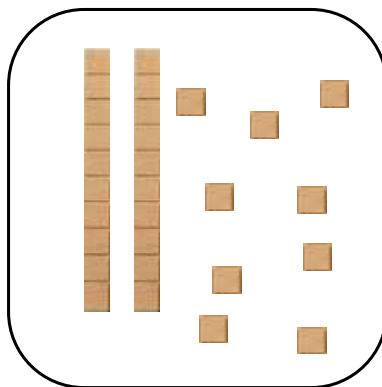
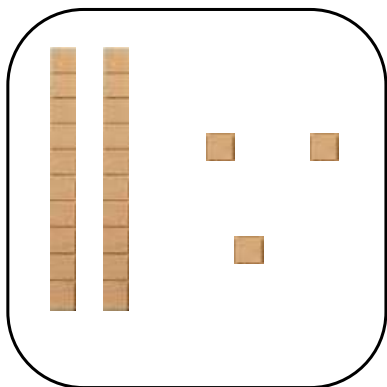
24

21

26



2 Skrivañ an niver.



3 Skrivañ an niveroù a vank.

		2				6	7		9
10			13		15				19
	21			24				28	