



Niveroù ha niveriñ

Kementadoù ha niveroù betek 40



1 Skrivañ pep niver a vank war an heuliad.



2 Kelc'hiañ an niver bihanañ bep tro.

5 35

14 29

36 19

34 35

3 Kelc'hiañ an niver brasañ bep tro.


30 3

23 30


30 9

35 39


4 Tresañ ar strolladoù 10 jedouer hag ar jedoueroù en o unan



31




25




35

Niveroù ha niveriñ

Kementadoù ha niveroù betek 40



1 Skrivañ pep niver a vank war an heuliad.



2 Kelc'hiañ an niver bihanañ bep tro.

16 | 36

28 | 32

39 | 40

37 | 35

3 Kelc'hiañ an niver brasañ bep tro.


33 | 3

34 | 24


30 | 32

37 | 29


4 Tresañ ar strolladoù 10 jedouer hag ar jedoueroù en o unan



18




30



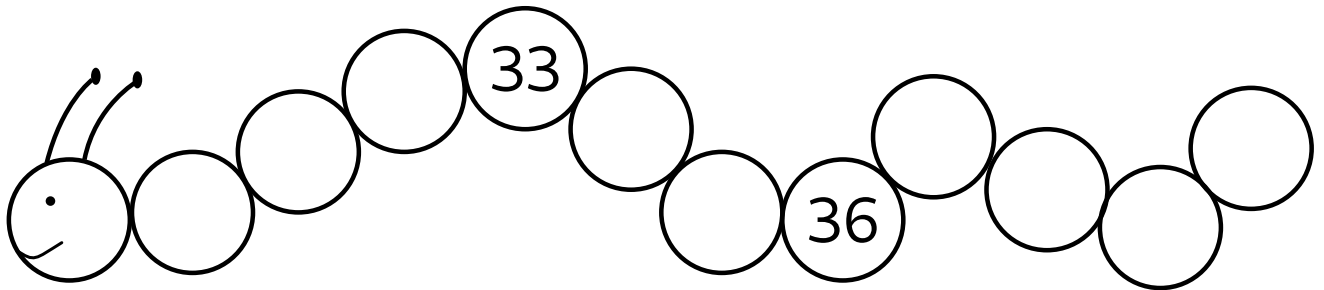
36

Niveroù ha niveriñ

Kementadoù ha niveroù betek 40



1 Skrivañ pep niver a vank war an heuliad.



2 Kelc'hiañ an niver bihanañ bep tro.

18 | 34

30 | 40

37 | 32

36 | 26

3 Kelc'hiañ an niver brasañ bep tro.


29 | 30

39 | 40


32 | 31

35 | 19


4 Tresañ ar strolladoù 10 jedouer hag ar jedoueroù en o unan



26



31




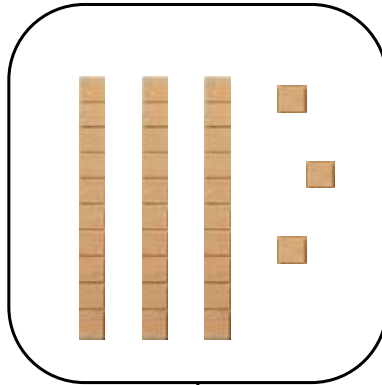

40

Niveroù ha niveriñ

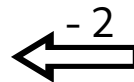
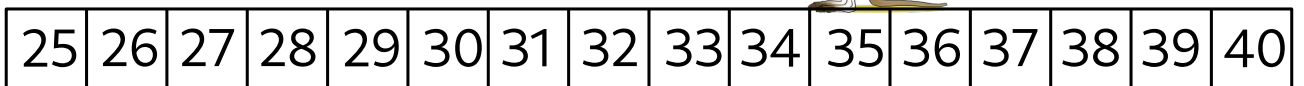
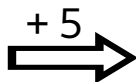
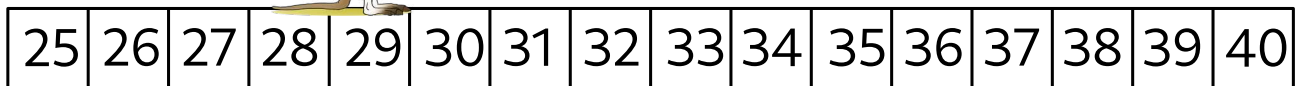

Kementadoù ha niveroù betek 40



1 Skrivañ an niver.



2 Jediñ ha livañ an niver mat.




3 Skrivañ an niveroù-mañ eus an hini bihanañ d'an hini brasañ.

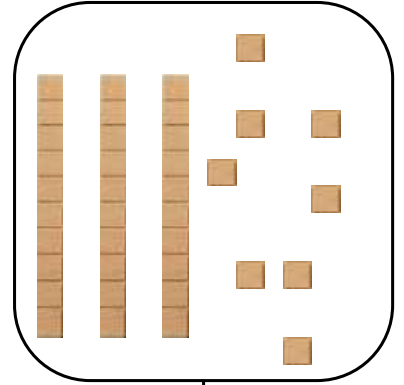
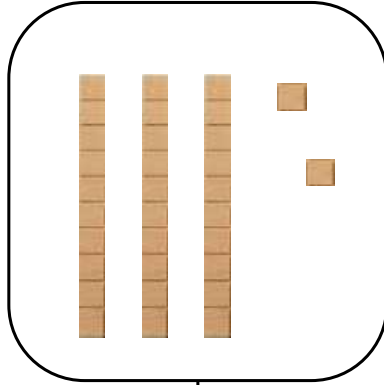

$$39 - 28 - 36$$

Niveroù ha niveriñ

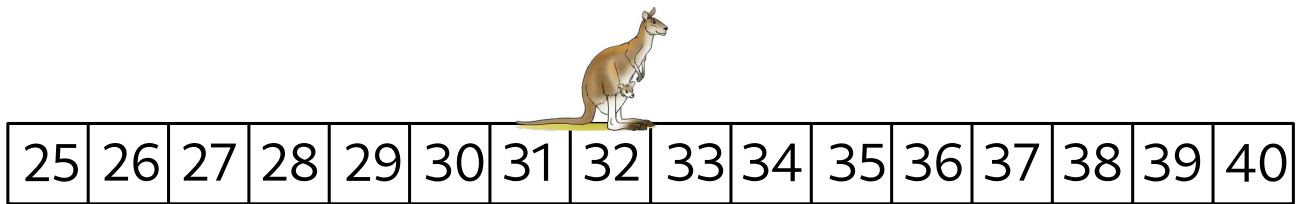
Kementadoù ha niveroù betek 40



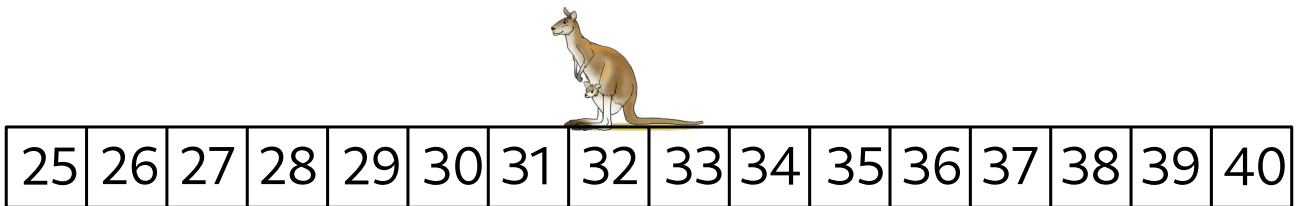
1 Skrivañ an niver.



2 Jediñ ha livañ an niver mat.



+4 →




← -3

3 Skrivañ an niveroù-mañ eus an hini bihanañ d'an hini brasañ.

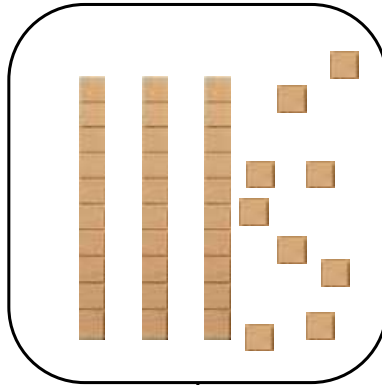

$$32 - 40 - 35$$

Niveroù ha niveriñ

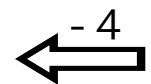
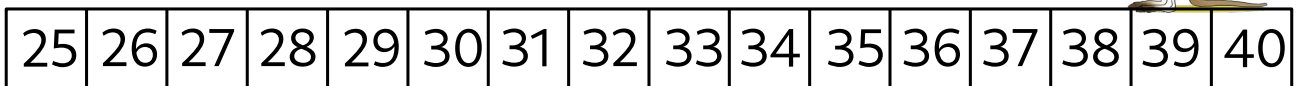
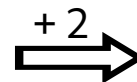
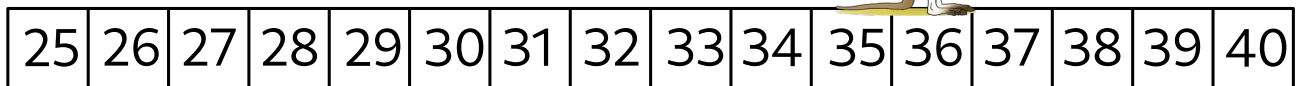
Kementadoù ha niveroù betek 40



1 Skrivañ an niver.



2 Jediñ ha livañ an niver mat.




3 Skrivañ an niveroù-mañ eus an hini bihanañ d'an hini brasañ.

$$32 - 40 - 35$$

Niveroù ha niveriñ

Kementadoù ha niveroù betek 40




1 Skrivañ an niveroù-mañ eus an hini brasañ d'an hini bihanañ.

$$34 - 30 - 20$$

2 Liammañ.


30	32	39	35	29
$30 + 9$	$30 + 2$	$30 + 0$	$20 + 9$	$30 + 5$

3 Pet 'zo?



Niveroù ha niveriñ

Kementadoù ha niveroù betek 40



1 Skrivañ an niveroù-mañ eus an hini brasañ d'an hini bihanañ.

$$39 - 40 - 20$$

2 Liammañ.

31

39

33

32

37

$30 + 9$


$30 + 1$

$30 + 3$

$30 + 7$


$30 + 2$

3 Pet 'zo?



Niveroù ha niveriñ

Kementadoù ha niveroù betek 40



1 Skrivañ an niveroù-mañ eus an hini brasañ d'an hini bihanañ.

$$31 - 33 - 19$$

Three empty rounded rectangular boxes for writing the numbers.

2 Liammañ.

40

38

31

30

36

$30 + 6$


$30 + 8$

$30 + 1$

$40 + 0$

$30 + 0$


3 Pet 'zo?



An empty rectangular box for writing the answer to the counting question.

Niveroù ha niveriñ

Kementadoù ha niveroù betek 40



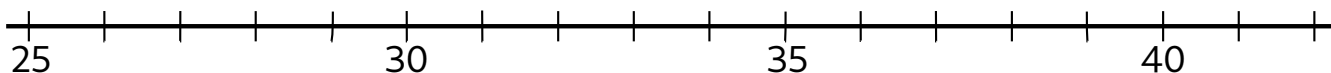
1 Liamm pep niver ouzh e verk war al linenn dereziet.

27


31

38


36




2 Tresañ ar strolladoù dek hag ar pikoù en o unan.



33



37




31

3 Skrivañ an niveroù a vank.

0	1	2				6			
				14			17		19
20			23		25			28	
	31					36		38	

Niveroù ha niveriñ

Kementadoù ha niveroù betek 40



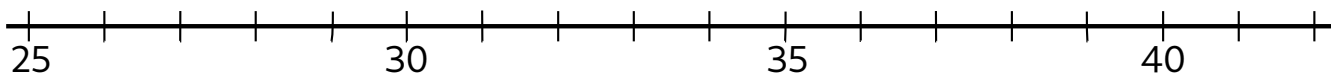
① Liamm pep niver ouzh e verk war al linenn dereziet.

32


28

33


39




② Tresañ ar strolladoù dek hag ar pikoù en o unan.



40



35




32

③ Skrivañ an niveroù a vank.

		2		4				9
10			13			16		19
			23		25		28	
	31						37	

Niveroù ha niveriñ

Kementadoù ha niveroù betek 40



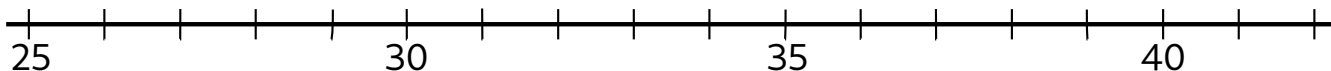
1 Liamm pep niver ouzh e verk war al linenn dereziet.

37


26

29


39




2 Tresañ ar strolladoù dek hag ar pikoù en o unan.



32



36



39

3 Skrivañ an niveroù a vank.

		2			5				9
10			13						
20				24		26		28	
	31				35		37		39